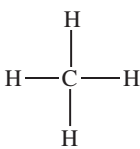




# VSEPR: Using Lewis Structures and VSEPR to Determine Molecular Geometry

## Post-Lab Questions

Calculate the valence electrons for each compound and draw its Lewis structure. Predict the Electron Pair Geometry (draw and name it) and the Molecular Geometry (draw and name it) for each of the compounds given.

Compound Formula (Count the valence electrons and find the number of electron pairs.)	Draw the Lewis structure	Electron Pair Geometry Diagram/Name	Molecular Geometry Diagram/Name
$\text{CH}_4$ Ex: $\text{C}: 4 \times 1 = 4$ $\text{H}: 1 \times 4 = 4$ $\underline{8e^- \div 2 \text{ or } 4 \text{ Pairs}}$		 Tetrahedral	 Tetrahedral
$\text{BCl}_3$			
$\text{SbCl}_6^-$			
$\text{PCl}_3$			
$\text{TeF}_4$			
$\text{NH}_4^+$			
$\text{BeCl}_2$			
$\text{AsH}_3$			

## Covalent Bonding and Molecular Structure Worksheet

Draw the Lewis structure for each of the following compounds. Using VSEPR, determine the electron pair geometry, the molecular geometry, and the bond angle (in degrees) for each compound.

1.  $\text{BeF}_2$

Lewis Structure:	Electron Geometry:	Molecular Geometry:	Bond Angle(s):

2.  $\text{H}_2\text{O}$

Lewis Structure:	Electron Geometry:	Molecular Geometry:	Bond Angle(s):

3.  $\text{BCl}_3$

Lewis Structure:	Electron Geometry:	Molecular Geometry:	Bond Angle(s):

4.  $\text{NH}_3$

Lewis Structure:	Electron Geometry:	Molecular Geometry:	Bond Angle(s):

5.  $\text{CH}_4$

Lewis Structure:	Electron Geometry:	Molecular Geometry:	Bond Angle(s):

6.  $\text{XeF}_4$

Lewis Structure:	Electron Geometry:	Molecular Geometry:	Bond Angle(s):

7.  $\text{ClF}_5$

Lewis Structure:	Electron Geometry:	Molecular Geometry:	Bond Angle(s):
------------------	--------------------	---------------------	----------------

8.  $\text{ClF}_3$

Lewis Structure:	Electron Geometry:	Molecular Geometry:	Bond Angle(s):
------------------	--------------------	---------------------	----------------

9.  $\text{SF}_4$

Lewis Structure:	Electron Geometry:	Molecular Geometry:	Bond Angle(s):
------------------	--------------------	---------------------	----------------

10.  $\text{OF}_2$

Lewis Structure:	Electron Geometry:	Molecular Geometry:	Bond Angle(s):
------------------	--------------------	---------------------	----------------